
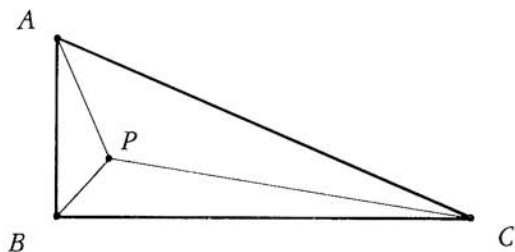


- An ordered pair (m, n) of non-negative integers is called "simple" if the addition $m + n$ in base 10 requires no carrying. Find the number of simple ordered pairs of non-negative integers that sum to 1492.
- What is the largest possible distance between two points, one on the sphere of radius 19 with center $(-2, -10, 5)$ and the other on the sphere of radius 87 with center $(12, 8, -16)$?
- By a proper divisor of a natural number we mean a positive integral divisor other than 1 and the number itself. A natural number greater than 1 will be called "nice" if it is equal to the product of its distinct proper divisors. What is the sum of the first ten nice numbers?
- Find the area of the region enclosed by the graph of $|x - 60| + |y| = \left| \frac{x}{4} \right|$.
- Find $3x^2y^2$ if x and y are integers such that $y^2 + 3x^2y^2 = 30x^2 + 517$.
- Rectangle $ABCD$ is divided into four parts of equal area by five segments as shown in the figure, where $XY = YB + BC + CZ = ZW = WD + DA + AX$, and PQ is parallel to AB . Find the length of AB (in cm) if $BC = 19$ cm and $PQ = 87$ cm.



7. Let $[r,s]$ denote the least common multiple of positive integers r and s . Find the number of ordered triples (a,b,c) of positive integers for which $[a,b] = 1000$, $[b,c] = 2000$, and $[c,a] = 2000$.
8. What is the largest positive integer n for which there is a unique integer k such that $\frac{8}{15} < \frac{n}{n+k} < \frac{7}{13}$?
9. Triangle ABC has right angle at B , and contains a point P for which $PA = 10$, $PB = 6$, and $\sphericalangle APB = \sphericalangle BPC = \sphericalangle CPA$. Find PC .



10. Al walks down to the bottom of an escalator that is moving up and he counts 150 steps. His friend, Bob, walks up to the top of the escalator and counts 75 steps. If Al's speed of walking (in steps per unit time) is three times Bob's speed, how many steps are visible on the escalator at any given time? (Assume that this number is constant.)
11. Find the largest possible value of k for which 3^{11} is expressible as the sum of k consecutive positive integers.
12. Let m be the smallest positive integer whose cube root is of the form $n + r$, where n is a positive integer and r is a positive real number less than $1/1000$. Find n .

13. A given sequence r_1, r_2, \dots, r_n of distinct real numbers can be put in ascending order by means of one or more "bubble passes". A bubble pass through a given sequence consists of comparing the second term with the first term and exchanging them if and only if the second term is smaller, then comparing the third term with the current second term and exchanging them if and only if the third term is smaller, and so on in order, through comparing the last term, r_n , with its current predecessor and exchanging them if and only if the last term is smaller.

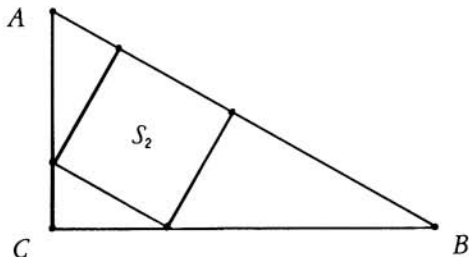
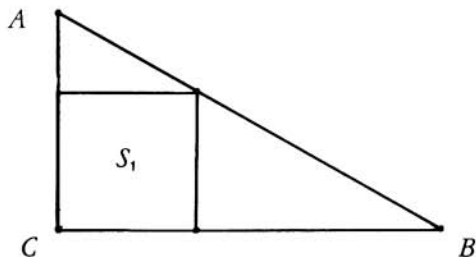
The example on the right shows how the sequence 1, 9, 8, 7 is transformed into the sequence 1, 8, 7, 9 by one bubble pass. The numbers compared at each step are underlined.

1	<u>9</u>	8	7
1	9	<u>8</u>	7
1	8	9	<u>7</u>
1	8	7	9

Suppose that $n = 40$, and that the terms of the initial sequence r_1, r_2, \dots, r_{40} are distinct from one another and are in random order. Let p/q , in lowest terms, be the probability that the number that begins as r_{20} will end up, after one bubble pass, in the 30th place (i. e., will have 29 terms on its left and 10 terms on its right). Find $p + q$.

14. Compute
$$\frac{(10^4 + 324)(22^4 + 324)(34^4 + 324)(46^4 + 324)(58^4 + 324)}{(4^4 + 324)(16^4 + 324)(28^4 + 324)(40^4 + 324)(52^4 + 324)}$$
.

15. Squares S_1 and S_2 are inscribed in right triangle ABC , as shown in the figures below. Find $AC + CB$ if area $(S_1) = 441$ and area $(S_2) = 440$.



SOLUTIONS

A 1987 Solutions Pamphlet will be sent to you for a nominal fee; for details, see below.

WRITE TO US!

Address questions and comments about the problems & solutions for this AIME to:

Professor George Berzsenyi, AIME Chairman
Department of Mathematics
Lamar University, Beaumont, TX 77710 USA

Comments about administrative arrangements, and orders for any of the publications listed below, should be addressed to:

Professor Walter E. Mientka, CAMC Executive Director
Department of Mathematics & Statistics
University of Nebraska, Lincoln, NE 68588-0322 USA

1987 USAMO

The USA Mathematical Olympiad is a 5 question, 3½ hour essay-type examination. The top scoring students on the AIME will be invited to take the USAMO on April 28, 1987. The best way to prepare for the USAMO is to study the exams from previous years and to review the content of the ARBELOS. The procedure to be used to purchase these publications is indicated below.

PUBLICATIONS

MINIMUM ORDER: \$5. (plus postage) **US FUNDS ONLY.** Make checks payable to MAA/AMC. Payments that are not in US FUNDS will be returned. Fourth Class Postage and handling free for prepaid orders from U.S.A. and Canada. First Class Postage and handling charge: 20% of the cost of the materials with a minimum charge of \$2.00. Purchase Orders received without payment will be assessed a \$3.00 handling fee, plus postage. **FOREIGN ORDERS — DO NOT PREPAY. AN INVOICE WILL BE SENT INCLUDING POSTAGE AND HANDLING. ALL PUBLICATIONS ARE COPYRIGHTED AND IT IS ILLEGAL TO MAKE ADDITIONAL COPIES WITHOUT PERMISSION. THEREFORE BE SURE TO ORDER ENOUGH COPIES.**

EXAMINATIONS. Each price is for one copy of an exam and its solutions for one year. Specify the years you want and how many copies of each. All prices effective to September 1, 1987.

AJHSME, 1985-86, American Junior High School Mathematics Examination, 50¢ per copy per year.

AHSME, 1972-87, Spanish editions, 1978-87, 50¢ per copy per year.

AIME, 1983-87, \$1.00 per copy per year.

USA and International Mathematical Olympiads (together), 1976-86, \$1.00 per copy per year.

National Summary of Results and Awards, 1976-86, \$3.00 per copy per year.

BOOKS.

Contest Problem Book I (\$7.50), AHSME exams and solutions, 1950-60.

Contest Problem Book II (\$7.50), AHSMEs 1961-65.

Contest Problem Book III (\$8.50), AHSMEs 1966-72.

Contest Problem Book IV (\$10.00), AHSMEs 1973-82.

International Mathematical Olympiads (\$8.50), exams and solutions, 1959-77.

JOURNAL. A journal called the ARBELOS containing short articles and challenging problems. Recommended for all students, particularly those who qualify for the AIME and USAMO. \$5.50 plus \$1.00 postage and handling charge for each 1986-87 subscription (5 issues). Past editions, 1982-83, 83-84, 84-85 and 85-86 are available at \$4.50 each. Canadian, APO/FPO: Add \$2.00 additional postage charge.